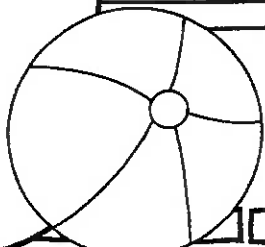


1st Grade
Summer Packet

This packet belongs to:



Parent Letter

Parents,
This packet was created to help your child retain what they learned during first grade. The pages were set up where your child will do a language arts and math sheet three times a week. The packet will give students the opportunity to practice writing, reading comprehension, addition, subtraction and many more skills that were covered in first grade. It should not take your child more than 20 to 30 minutes to complete one front and back sheet.

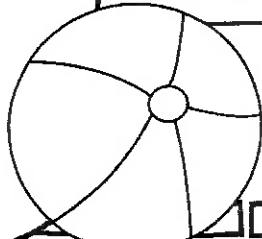
For this packet to work best, it is important to only do what is allotted for that week. Finishing the entire packet in one week will not help your child retain the information throughout the summer. It is also important to allow your child to work independently and then review the pages with them when completed. Each page is structured to encourage your child to work independently.

There is also a reading log included in this packet. This way your child can record how much they read each day. It is suggested that children read 20 minutes a day.



At the end of the summer, please have your child return the packet to me completed for a special treat.

Thank you for taking an active role in your child's education.

Have a great summer!



Week 1: Day 1



Syllables

Put the 6 words in the correct box.

summer fun shovel
bucket beach crab

1 syllable

2 syllables

ABC Order

Put the 6 words in ABC Order.

bag rat tag
cat lag fat


1. _____
2. _____
3. _____

4. _____
5. _____
6. _____

Categories

Circle the pictures that fit in the category written below

animals



Nouns

Circle the people, places, & things

trees run
play ball
eat beach
pencil of
the girl

Root Words

Circle the root words below.

eat	eating
plays	play
running	run
write	writes
walk	walked

Sentence Construction


Correct the sentences below. Rewrite them correctly.

1. the sun is bright

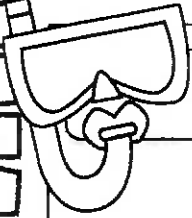

1. _____

2. he has a bucket

2. _____



Week 1: Day 1



Addition

Find the sums for each problem below.


$8 + \underline{\quad} = 12$

35

$\underline{\quad} + 3 = 14$

$\begin{array}{r} 35 \\ +24 \\ \hline \end{array}$

$6 + \underline{\quad} = 11$



Subtraction

Find the difference for each problem below.

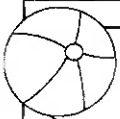
$12 - 6 = \underline{\quad}$

46

$14 - 7 = \underline{\quad}$

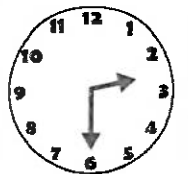
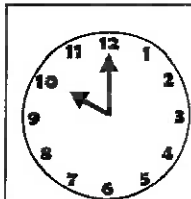
$\begin{array}{r} 46 \\ -23 \\ \hline \end{array}$

$18 - 9 = \underline{\quad}$



Time

Write the times shown on the clocks



:

:



Shapes

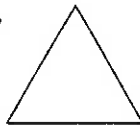
Answer the questions about the shapes below.

1.



___ sides
___ corners

2.

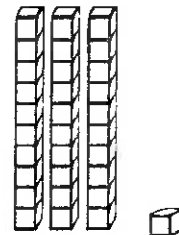


___ sides
___ corners



Place Value

Write how many tens and ones you have for each problem.



___ tens ___ ones = ___
___ + ___ = ___

Word Problem

Answer the problem below. Show your work.

The girl had 2 apples, 3 oranges, and 2 bananas. How much fruit did she have in all?

add

subtract

$\underline{\quad} \square \underline{\quad} \square = \underline{\quad}$

Fact Families

Using the numbers below, create a fact family.

5

3


8

$\underline{\quad} + \underline{\quad} = \underline{\quad}$



$\underline{\quad} + \underline{\quad} = \underline{\quad}$

$\underline{\quad} - \underline{\quad} = \underline{\quad}$

$\underline{\quad} - \underline{\quad} = \underline{\quad}$




Week 1: Day 2



Reading Comprehension

Zack and Max went to the beach with their parents. When they got there Zack wanted to play in the sand. Max wanted to go in the water. They decided to flip a coin. Zack called heads and Max called tails. The coin landed on heads so the boys built a sand castle first. After they finished building the sand castle, the boys ran into the water. They saw lots of little fish. When they got out of the water, they picked up shells. Zack and Max had a great day at the beach!



Read the story above. Use the story to answer the questions.

1. Who are the main characters in the story?

3. What did the boys do at the beach?

2. What is the setting?

4. What would you do at the beach?

Sentence Construction


Correct the sentences below. Rewrite them correctly.


1. pam and sam found two fish

1.

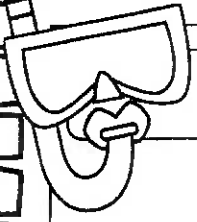

2. did she wear the hat

2.





Week 1: Day 2




Addition

Find the sums for each problem below.

$$9 + 3 = \underline{\quad\quad} \quad 46$$

$$5 + 6 = \underline{\quad\quad} \quad \begin{array}{r} +32 \\ \hline \square \end{array}$$

$$7 + 6 = \underline{\quad\quad}$$



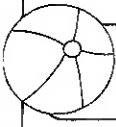
Subtraction

Find the difference for each problem below

$$9 - 4 = \underline{\quad\quad} \quad 59$$

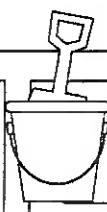
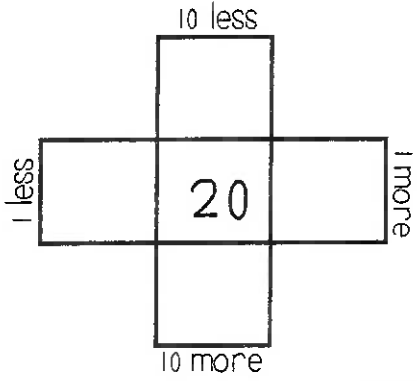
$$15 - 8 = \underline{\quad\quad} \quad \begin{array}{r} -43 \\ \hline \square \end{array}$$

$$11 - 4 = \underline{\quad\quad}$$



Multiples of 10

Write in the missing numbers..



Fractions

Answer the questions about the fractions below

1.

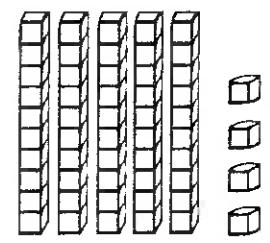
--	--	--	--

2.



Place Value

Write how many tens and ones you have for each problem.



_____ tens _____ ones = _____

_____ + _____ = _____

Word Problem

Answer the problem below. Show your work.


Sam has 12 pencils. He gives some away. He has 8 left. How many pencils did he give away?

add
subtract

_____ \square _____ = _____

Fact Families

Using the numbers below, create a fact family.




$8 + \underline{\quad} = 10$

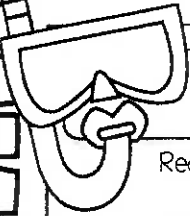

$2 + 8 = \underline{\quad}$

$10 - \underline{\quad} = 8$

$\underline{\quad} - 8 = 2$



Week 1: Day 3



Dictionary Skills

Read the definitions. Decide which definition was used in the sentence.

duck

1. a bird that quacks (noun)
2. to get out of the way of something (verb)

The duck swam in the lake.

- Definition 1
- Definition 2

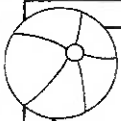


ABC Order

Put the 6 words in ABC Order.

rate	fate	tale
bale	date	pale

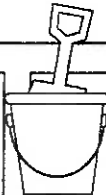

1. _____	4. _____
2. _____	5. _____
3. _____	6. _____



Categories

Circle the pictures that fit in the category written below.

foods



Verbs

Circle the verbs (action words) below.

out	write
cow	run
sleep	pen
drink	pretty
tall	make



Compound Words

Circle the compound words below.

footprint	watermelon
careful	focused
helped	airport
charter	railroad
baseball	largest

Sentence Construction


Correct the sentences below. Rewrite them correctly.


1. did you go to the store

1. _____

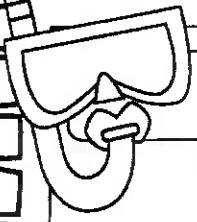

2. my birthday is in march

2. _____





Week 1: Day 3




Addition

Find the sums for each problem below.

$2 + 1 + 3 = \underline{\quad} \quad 85$

$9 + 2 + 4 = \underline{\quad} \quad \begin{array}{r} +20 \\ \hline \square \end{array}$

$3 + 3 + 3 = \underline{\quad}$



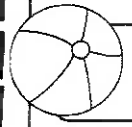
Subtraction

Find the difference for each problem below.

$15 - 9 = \underline{\quad} \quad 78$

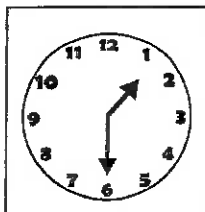
$9 - 8 = \underline{\quad} \quad \begin{array}{r} -41 \\ \hline \square \end{array}$

$13 - 6 = \underline{\quad}$

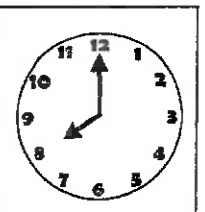


Time

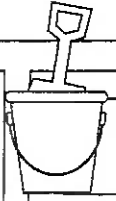
Write the times shown on the clocks.



:
:



:
:



Counting

Fill in the missing numbers.

2, 3, , , 6

14, , , 17,

41, 42, 43, , ,

 , , 56, 57,



Comparing Numbers

Fill in the blanks with >, <, or =.

31 38

15 20

50 40

8 12

Word Problem

Answer the problem below. Show your work.

Bella caught the ball 5 times yesterday and 9 times today. How many times did Bella catch the ball in all?

add

subtract


 \square =

Graphing

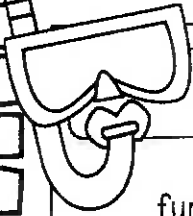

Use the graph below to answer the questions

	1	2	3	4
Cats				
Dogs				

- How many kids chose dogs?
- How many kids chose cats?
- How many kids voted in all?



Week 2: Day 1




Syllables

Put the 6 words in the correct box.

- funny nice cool
 pretty great awesome

1 syllable

2 syllables



ABC Order

Put the 6 words in ABC Order.

- dog hamster cat
 lizard bird fish


1. _____
 2. _____
 3. _____

4. _____
 5. _____
 6. _____

Categories

Circle the pictures that fit in the category written below.

birthday



Adjectives

Find the describing words.

- funny eat
 doll nice
 grass boy
 yellow skinny
 an tall

Root Words

Circle the root words below.

drink	drinking
earned	earn
carries	carry
host	hosted
make	makes

Sentence Construction

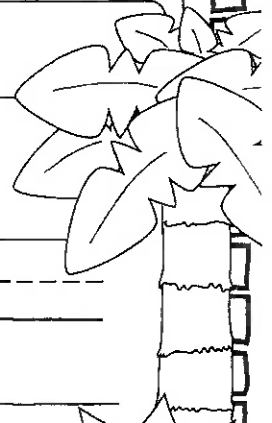
Correct the sentences below. Rewrite them correctly.


1. the flowers are blue

1. _____


2. april comes before may

2. _____





Week 2: Day 1



Addition

Find the sums for each problem below.


$10 + \underline{\quad} = 12$

57

$\underline{\quad} + 7 = 10$

$\begin{array}{r} +42 \\ \hline \end{array}$

$8 + \underline{\quad} = 13$



Subtraction

Find the difference for each problem below.

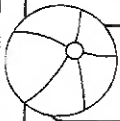
$18 - 6 = \underline{\quad}$

58

$12 - 7 = \underline{\quad}$

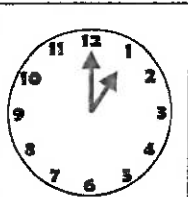
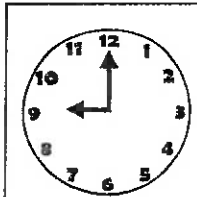
$\begin{array}{r} -20 \\ \hline \end{array}$

$16 - 8 = \underline{\quad}$



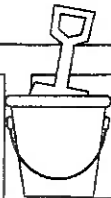
Time

Write the times shown on the clocks.



:

:



Shapes

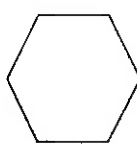
Answer the questions about the shapes below.

1.



___ sides
___ corners

2.

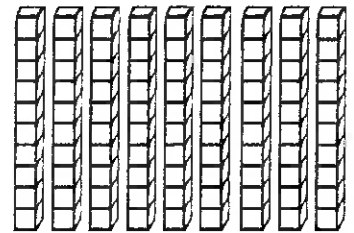


___ sides
___ corners



Place Value

Write how many tens and ones you have for each problem.



___ tens ___ ones = ___

___ + ___ = ___

Word Problem

Answer the problem below. Show your work.

April had 2 pens. Max had 4 pens.
Sam had 6 pens. How many pens
did they have altogether?

add

subtract

$\underline{\quad} \square \square \square = \underline{\quad}$

Fact Families

Using the numbers below, create a fact family.

9

4

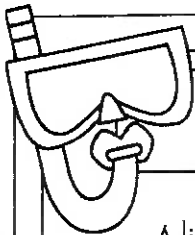


13

$\underline{\quad} + \underline{\quad} = \underline{\quad}$

$\underline{\quad} + \underline{\quad} = \underline{\quad}$


$\underline{\quad} - \underline{\quad} = \underline{\quad}$

$\underline{\quad} - \underline{\quad} = \underline{\quad}$



Reading Comprehension

Alicia and Pam like to go to school. They get to learn new things and they get to see their friends. Both of them are in first grade with Mrs. Johnson. Alicia's favorite subject is science. She likes to learn about plants. Pam's favorite subject is math. She likes to see how fast she can add. Both of them love recess. Alicia likes the swings and Pam likes the slide. Alicia and Pam think that school is a lot of fun.



Read the story above. Use the story to answer the questions.

1. Who are the main characters in the story?

3. How are Alicia and Pam alike?

2. What is the setting?

4. How are Alicia and Pam different?

Sentence Construction


Correct the sentences below. Rewrite them correctly.


1. how old is your sister

1.

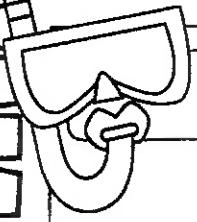

2. where is the school

2.





Week 2: Day 2




Addition

Find the sums for each problem below.

$10 + 6 = \underline{\quad} \quad 50$

$9 + 8 = \underline{\quad} \quad \begin{array}{r} +25 \\ \hline \square \end{array}$

$3 + 4 = \underline{\quad}$



Subtraction

Find the difference for each problem below.

$11 - 7 = \underline{\quad} \quad 68$

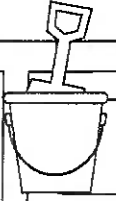
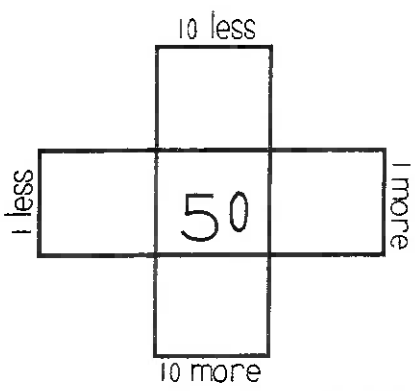
$16 - 9 = \underline{\quad} \quad \begin{array}{r} -22 \\ \hline \square \end{array}$

$8 - 6 = \underline{\quad}$



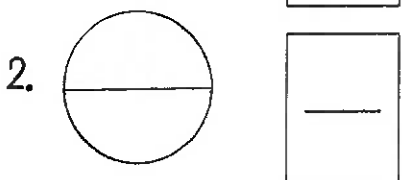
Multiples of 10

Write in the missing numbers



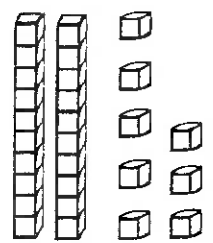
Fractions

Answer the questions about the fractions below



Place Value

Write how many tens and ones you have for each problem



tens ones =

+ =

Word Problem

Answer the problem below. Show your work

Ann had 14 pieces of candy. She gave 6 pieces to her brother. How many pieces does she have left?

add
subtract

$\underline{\quad} \square \underline{\quad} = \underline{\quad}$

Fact Families

Using the numbers below, create a fact family.




$9 + \underline{\quad} = 13$


$4 + 9 = \underline{\quad}$

$13 - \underline{\quad} = 4$

$\underline{\quad} - 4 = 9$



Week 2: Day 3




Dictionary Skills

Read the definitions. Decide which definition was used in the sentence.

- ring
- a round object you wear on your finger(noun)
 - the sound a phone makes(verb)

My ring is on my left hand.

- Definition 1
- Definition 2

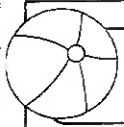


ABC Order

Put the 6 words in ABC Order.

- | | | |
|--------|--------|-------|
| fruit | orange | apple |
| grapes | banana | pear |

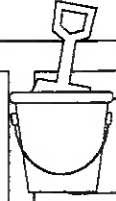

1. _____	4. _____
2. _____	5. _____
3. _____	6. _____



Categories

Circle the pictures that fit in the category written below.

circus



Proper Nouns

Circle the words that need capital letters

- | | |
|---------|----------|
| july | girl |
| toys | thursday |
| sunday | cupcake |
| october | balloon |
| dog | december |



Compound Words

Circle the compound words below

sunshine	running
movie	hotdog
hamburger	computer
fireworks	funny
blankets	butterfly

Sentence Construction


Correct the sentences below. Rewrite them correctly.


1. my sister likes to eat donuts

1. _____

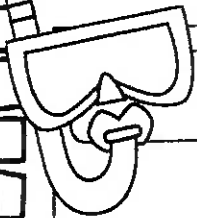

2. jessica likes to draw

2. _____





Week 2: Day 3



Addition

Find the sums for each problem below.

$3 + 2 + 3 = \underline{\quad\quad} \quad 76$

$8 + 2 + 1 = \underline{\quad\quad} \quad \begin{array}{r} +31 \\ \hline \square \end{array}$

$4 + 5 + 3 = \underline{\quad\quad}$



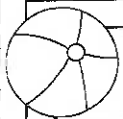
Subtraction

Find the difference for each problem below

$12 - 0 = \underline{\quad\quad} \quad 28$

$10 - 1 = \underline{\quad\quad} \quad \begin{array}{r} -6 \\ \hline \square \end{array}$

$14 - 3 = \underline{\quad\quad}$



Time

Write the times shown on the clocks.

<input type="text"/>	<input type="text"/>



Counting

Fill in the missing numbers.

$8, 9, \underline{\quad}, \underline{\quad}, 12, \underline{\quad}$

$\underline{\quad}, \underline{\quad}, 22, 23, \underline{\quad}$

$50, \underline{\quad}, 52, \underline{\quad}, \underline{\quad}$

$\underline{\quad}, 66, \underline{\quad}, \underline{\quad}, 69$



Comparing Numbers

Fill in the blanks with $>$, $<$, or $=$.

$20 \underline{\quad} 25$

$34 \underline{\quad} 31$

$10 \underline{\quad} 5$

$52 \underline{\quad} 63$

Word Problem

Answer the problem below. Show your work.

Max found 7 seashells on Monday and 8 seashells on Tuesday. How many seashells did he find in all?

add

subtract


$\underline{\quad} \square \underline{\quad} = \underline{\quad}$

Graphing

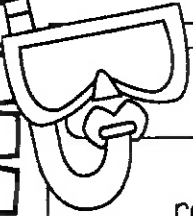

Use the graph below to answer the questions.

	1	2	3	4	5
Pizza					
Burger					

- How many kids chose pizza? $\underline{\quad}$
- How many kids chose burgers? $\underline{\quad}$
- How many kids voted in all? $\underline{\quad}$



Week 3: Day 1



Syllables

Put the 6 words in the correct box.

red yellow purple
blue orange green

1 syllable

2 syllables



ABC Order

Put the 6 words in ABC Order.

shovel bucket towel
ocean flip flops popsicle

1. _____

2. _____

3. _____

4. _____


5. _____

6. _____

Categories

Circle the pictures that fit in the category written below.

picnic



Adjectives

Find the describing words.

silly run
blue little
car wrote
hard marker
bird hot

Root Words

Circle the root words below.

walks	walk
talking	talk
eats	eat
call	called
cold	colder

Sentence Construction

Correct the sentences below. Rewrite them correctly.



1. my dog can run and jump

1. _____

2. meg wrote a letter

2. _____

Week 3: Day 1



Addition

Find the sums for each problem below.

$9 + \underline{\quad} = 11$

50

$\underline{\quad} + 10 = 10$

$+30$

$7 + \underline{\quad} = 14$

Subtraction

Find the difference for each problem below.

$18 - 9 = \underline{\quad}$

43

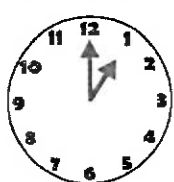
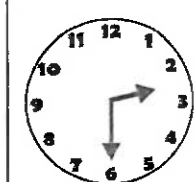
$12 - 11 = \underline{\quad}$

-31

$15 - 7 = \underline{\quad}$

Time

Write the times shown on the clocks.

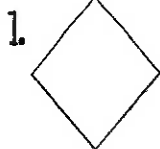


:

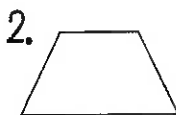
:

Shapes

Answer the questions about the shapes below.



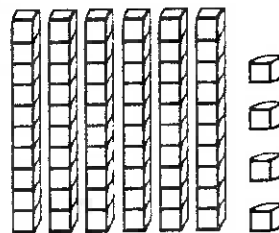
___ sides
___ corners



___ sides
___ corners

Place Value

Write how many tens and ones you have for each problem.



___ tens ___ ones = ___
+ ___ = ___

Word Problem

Answer the problem below. Show your work.

Cam had 6 baseballs. Max had 3 baseballs. Sam had 4 baseballs. How many baseballs did they have altogether?

add

subtract

$\underline{\quad} \square \square \square = \underline{\quad}$

Fact Families

Using the numbers below, create a fact family.

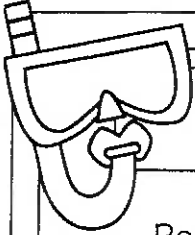


6	2	8
---	---	---

$\underline{\quad} + \underline{\quad} = \underline{\quad}$

$\underline{\quad} + \underline{\quad} = \underline{\quad}$

$\underline{\quad} - \underline{\quad} = \underline{\quad}$

$\underline{\quad} - \underline{\quad} = \underline{\quad}$



Reading Comprehension

Ben is my dog. He likes to bark at big trucks. He likes to catch his baseball. When he gets hungry, Ben pushes his dish to my feet. One day, I went outside to get the mail. When I came back inside I could not find Ben. I looked under my bed, in the bathroom, and in the kitchen. He was not in any of those places. All of a sudden, I heard a scratching noise and a bark. I ran to the door and opened it. Ben had followed me outside. I gave him a treat for waiting for me. Ben is a great dog!



Read the story above. Use the story to answer the questions.

1. Who are the main characters in the story?

3. Name two places the boy looked for Ben.

2. What was the problem?

4. Where was Ben?

Sentence Construction

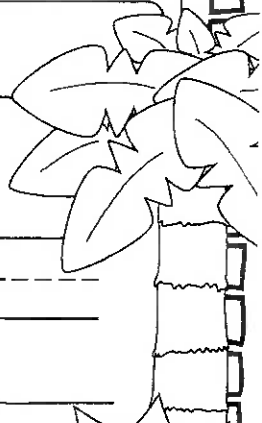
Correct the sentences below. Rewrite them correctly.


1. who took max home

1.

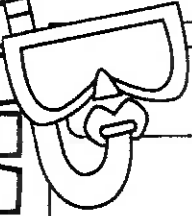

2. did the boys go to walmart

2.





Week 3: Day 2




Addition

Find the sums for each problem below.

$10 + 3 = \underline{\quad} \quad 43$

$6 + 4 = \underline{\quad} \quad \begin{array}{r} +41 \\ \hline \square \end{array}$

$11 + 2 = \underline{\quad}$



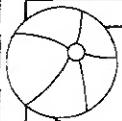
Subtraction

Find the difference for each problem below.

$13 - 5 = \underline{\quad} \quad 37$

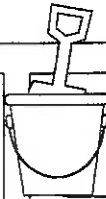
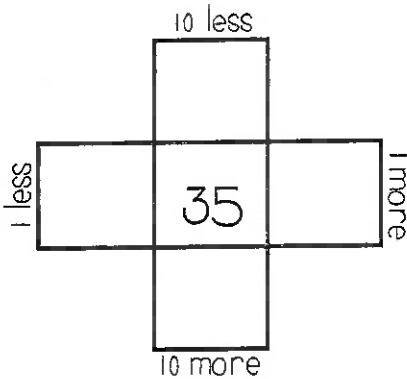
$14 - 9 = \underline{\quad} \quad \begin{array}{r} -14 \\ \hline \square \end{array}$

$15 - 6 = \underline{\quad}$





Multiples of 10

Write in the missing numbers.



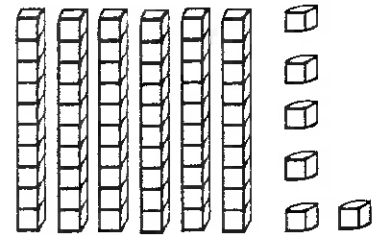
Fractions

Answer the questions about the fractions below.



Place Value

Write how many tens and ones you have for each problem.



$\underline{\quad}$ tens $\underline{\quad}$ ones = $\underline{\quad}$
 $\underline{\quad}$ + $\underline{\quad}$ = $\underline{\quad}$

Word Problem

Answer the problem below. Show your work.

Kristen went to the beach for 10 days. Her sister went for 3 days. How many more days did Kristen go to the beach than her sister?

add

subtract

$\underline{\quad} \square \underline{\quad} = \underline{\quad}$

Fact Families

Using the numbers below, create a fact family.




$6 + \underline{\quad} = 15$

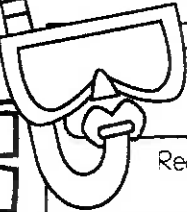

$6 + 9 = \underline{\quad}$

$15 - \underline{\quad} = 6$

$\underline{\quad} - 6 = 9$



Week 3: Day 3



Dictionary Skills


Read the definitions. Decide which definition was used in the sentence.

bat

- an object used to hit a ball (noun)
- an animal that flies at night (noun)

He hit a foul ball with my bat.

- Definition 1
- Definition 2

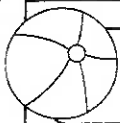


ABC Order

Put the 6 words in ABC Order.

- | | | |
|------|------|-------|
| rock | sock | dock |
| lock | mock | crook |

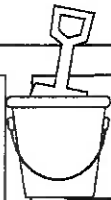

1. _____	4. _____
2. _____	5. _____
3. _____	6. _____



Categories

Circle the pictures that fit in the category written below.

bugs



Proper Nouns

Circle the words that need capital letters.

- | | |
|---------|----------|
| july | girl |
| toys | thursday |
| sunday | cupcake |
| october | balloon |
| dog | december |



Compound Words

Circle the compound words below.

subway	yellow
handy	airplane
toothpick	nicest
seashore	coaches
friends	basketball

Sentence Construction

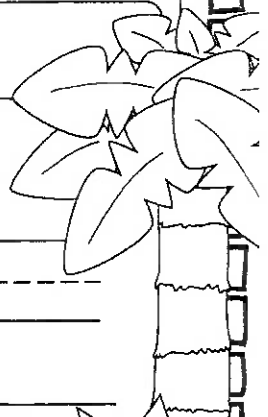
Correct the sentences below. Rewrite them correctly.


1. june and july are very hot months

1. _____

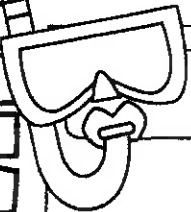

2. we went surfing in california

2. _____





Week 3: Day 3




Addition

Find the sums for each problem below.

$3 + 1 + 4 = \underline{\quad\quad} \quad 72$

$7 + 2 + 3 = \underline{\quad\quad} \quad \begin{array}{r} +23 \\ \hline \square \end{array}$

$5 + 5 + 5 = \underline{\quad\quad}$



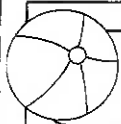
Subtraction

Find the difference for each problem below

$14 - 4 = \underline{\quad\quad} \quad 59$

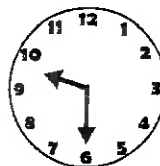
$14 - 5 = \underline{\quad\quad} \quad \begin{array}{r} -9 \\ \hline \square \end{array}$

$14 - 6 = \underline{\quad\quad}$



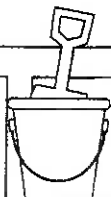
Time

Write the times shown on the clocks



:

:



Counting

Fill in the missing numbers.

$21, 22, \underline{\quad}, \underline{\quad}, 25, \underline{\quad}$

$\underline{\quad}, \underline{\quad}, 76, 77, \underline{\quad}$

$28, \underline{\quad}, 30, \underline{\quad}, \underline{\quad}$

$\underline{\quad}, 110, \underline{\quad}, \underline{\quad}, 113$



Comparing Numbers

Fill in the blanks with $>$, $<$, or $=$

$5 + 1 \underline{\quad} 3 + 2$

$4 + 0 \underline{\quad} 3 + 3$

$8 + 1 \underline{\quad} 10$

$12 \underline{\quad} 4 + 6$

Word Problem

Answer the problem below. Show your work.

Max caught 3 fish on Monday, 2 fish on Tuesday, and 4 fish on Wednesday. How many fish did he catch in all?

add

subtract

$\underline{\quad} \square \underline{\quad} \square \underline{\quad} = \underline{\quad}$



Graphing

Use the graph below to answer the questions

	1	2	3	4	5
Beach					
Camping					

- How many went to the beach? $\underline{\quad}$
- How many went camping? $\underline{\quad}$
- How many more went to the beach than camping? $\underline{\quad}$

Week 4: Day 1



Syllables

Put the 6 words in the correct box.

burger fries cupcake
hotdog drink chips

1 syllable

2 syllables

ABC Order

Put the 6 words in ABC Order.

ketchup mustard hamburger
lettuce tomato pickles

1. _____

4. _____

2. _____

5. _____


3. _____

6. _____

Categories

Circle the pictures that fit in the category written below.

Desserts



Verbs

Circle the verbs (action words) below

run play
big wolf
jump desk
talk friends
blue walk

Root Words

Circle the root words below

watched	watch
bigger	big
raise	raised
tell	telling
matched	match

Sentence Construction


Correct the sentences below. Rewrite them correctly.

1. we ate chips and hotdogs

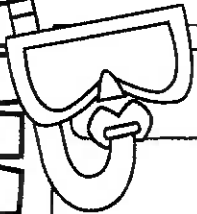

1. _____

2. the boys went to burger king

2. _____



Week 4: Day 1



Addition

Find the sums for each problem below.


$6 + \underline{\quad} = 17$

70

$\underline{\quad} + 2 = 10$

$+10$

$9 + \underline{\quad} = 13$



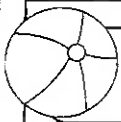
Subtraction

Find the difference for each problem below.

$19 - 10 = \underline{\quad} \quad 45$

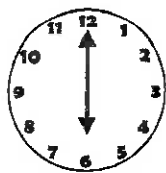
$11 - 11 = \underline{\quad} \quad -20$

$13 - 5 = \underline{\quad}$



Time

Write the times shown on the clocks.



:

:



Shapes

Read the questions. Circle the answers for each question.

1.



What shape is this?
square
rectangle

2.

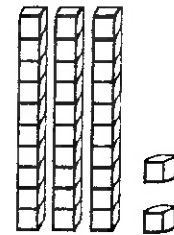


What shape is this?
hexagon
trapezoid



Place Value

Write how many tens and ones you have for each problem.



 tens ones =

 + =

Word Problem

Answer the problem below. Show your work.

Zack had 8 hats. His brother gave him 8 more hats. How many hats does Zack have in all?

add

subtract

_____ _____ = _____

Fact Families

Using the numbers below, create a fact family.

10

4


14

$\underline{\quad} + \underline{\quad} = \underline{\quad}$



$\underline{\quad} + \underline{\quad} = \underline{\quad}$

$\underline{\quad} - \underline{\quad} = \underline{\quad}$

$\underline{\quad} - \underline{\quad} = \underline{\quad}$




Week 4: Day 2



Reading Comprehension

Sam's favorite meal is breakfast. His favorite breakfast is eggs, pancakes, and bacon. Sometimes he eats cereal. Once a week, he eats grits and ham. He always drinks orange juice with his breakfast. The only thing he does not like is oatmeal. Sam thinks it is yuck. One time, his sister tried to trick him. She put a piece of cheese on top of oatmeal and told Sam that it was cheese grits. He took one bite and spit them out on the table. That was the only day that breakfast was not his favorite meal.



Read the story above. Use the story to answer the questions.

1. Who are the characters in the story?

3. Name Sam's favorite foods to eat at breakfast.

2. What is Sam's favorite meal?

4. How did his sister trick him?

Sentence Construction


Correct the sentences below. Rewrite them correctly.


1. it is cold in january

1.

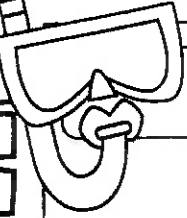

2. max's shirt is blue and red

2.





Week 4: Day 2



Addition

Find the sums for each problem below.

$6 + 3 = \underline{\quad} \quad 52$

$6 + 4 = \underline{\quad} \quad \begin{array}{r} +24 \\ \hline \end{array}$

$6 + 5 = \underline{\quad} \quad \begin{array}{|c|} \hline \square \\ \hline \end{array}$

$6 + 5 = \underline{\quad}$



Subtraction

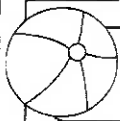
Find the difference for each problem below.

$11 - 4 = \underline{\quad} \quad 46$

$10 - 9 = \underline{\quad} \quad \begin{array}{r} -15 \\ \hline \end{array}$

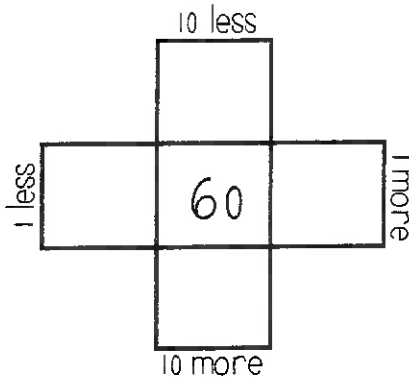
$10 - 9 = \underline{\quad} \quad \begin{array}{|c|} \hline \square \\ \hline \end{array}$

$8 - 4 = \underline{\quad}$



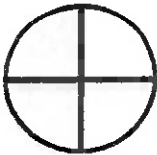
Multiples of 10


Write in the missing numbers



Fractions

Answer the questions about the fractions below

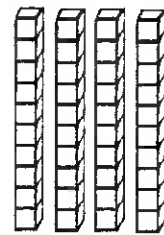
1.  $\frac{\quad}{\quad}$

2.  $\frac{\quad}{\quad}$



Place Value

Write how many tens and ones you have for each problem.



$$\begin{array}{r} \underline{\quad} \text{ tens } \underline{\quad} \text{ ones} = \underline{\quad} \\ + \underline{\quad} = \underline{\quad} \end{array}$$

Word Problem

Answer the problem below. Show your work

Jessica has 20 rings. She gave 10 to Meg. How many does she have now?

add

subtract

$\underline{\quad} \square \underline{\quad} = \underline{\quad}$


Fact Families

Using the numbers below, create a fact family.

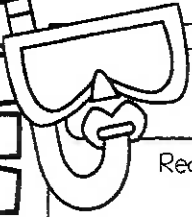



$8 + \underline{\quad} = 16$

$16 - \underline{\quad} = 8$



Week 4: Day 3



Dictionary Skills

Read the definitions. Decide which definition was used in the sentence.

bat

- an object used to hit a ball(noun)
- an animal that flies at night(noun)

He hit a foul ball with my bat.

- Definition 1
- Definition 2

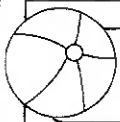


ABC Order

Put the 6 words in ABC Order.

lame	same	fame
came	tame	game


1. _____	4. _____
2. _____	5. _____
3. _____	6. _____



Categories

Circle the pictures that fit in the category written below.

cold



Pronouns

Circle the words that are pronouns

he	call
I	my
can	Meg
hops	them
their	chair



Compound Words

Circle the compound words below.

called	blackberry
pancake	raked
bedroom	computer
eating	superman
eyelid	better

Sentence Construction

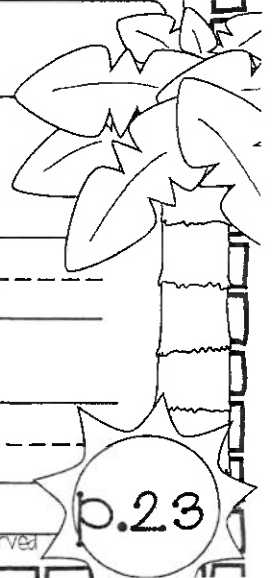
Correct the sentences below. Rewrite them correctly.


1. can you call meg for me

1. _____

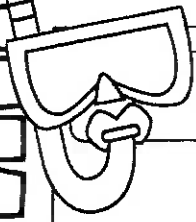

2. did you see the huge bear

2. _____





Week 4: Day 3




Addition

Find the sums for each problem below.

$5 + 3 + 6 = \underline{\quad\quad} \quad 48$

$6 + 1 + 4 = \underline{\quad\quad} \quad \begin{array}{r} +31 \\ \hline \square \end{array}$

$3 + 0 + 7 = \underline{\quad\quad}$



Subtraction

Find the difference for each problem below.

$10 - 2 = \underline{\quad\quad} \quad 32$

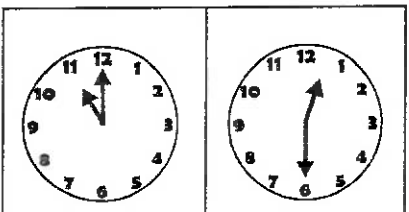
$10 - 1 = \underline{\quad\quad} \quad \begin{array}{r} -10 \\ \hline \square \end{array}$

$10 - 0 = \underline{\quad\quad}$



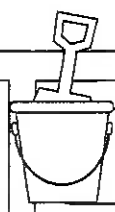
Time

Write the times shown on the clocks.



:
:

:
:



Counting

Fill in the missing numbers

27, 28, , , 31,

 , , 85, 86,

43, , 45, ,

 , 102, , , 105



Comparing Numbers

Fill in the blanks with >, <, or =.

$8 - 0 \underline{\quad\quad} 9 - 3$

$5 - 3 \underline{\quad\quad} 2$

$10 \underline{\quad\quad} 9 - 1$

$7 - 2 \underline{\quad\quad} 10 - 5$

Word Problem

Answer the problem below. Show your work.

Cam ate 3 eggs and 2 pieces of bacon. How much did he eat in all?

add

subtract


 \square =

Graphing


Use the graph below to answer the questions.

	1	2	3	4	5
Cats					
Dogs					

- How many chose cats?
- How many more chose dogs than cats?
- How many voted in all?



Week 5: Day 1




Syllables

Put the 6 words in the correct box.

- | | | |
|------|--------|-------|
| Max | Debble | Kelly |
| Hope | Anna | Zack |

1 syllable

2 syllables



ABC Order

Put the 6 words in ABC Order.

- | | | |
|--------|------------|------------|
| cherry | watermelon | strawberry |
| apple | grapes | banana |

- | | |
|----------|----------|
| 1. _____ | 4. _____ |
| 2. _____ | 5. _____ |
| 3. _____ | 6. _____ |

Vowels

Circle the words with long vowels.

- | | |
|------|------|
| bit | lime |
| dime | mist |
| tile | Tim |
| did | mine |
| dim | rise |



Nouns

Find the people, places, and things.

- | | |
|-------|------|
| hands | blue |
| cold | ant |
| hurt | cry |
| door | cup |
| clip | soft |



Root Words

Circle the root words below.

hard	hardest
nicer	nice
quicker	quick
loud	loudest
softest	soft

Sentence Construction

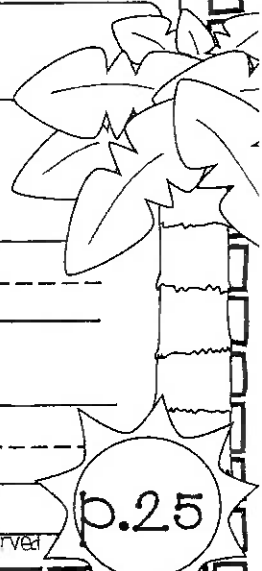
Correct the sentences below. Rewrite them correctly.


1. tomorrow is july 5 2012

1. _____

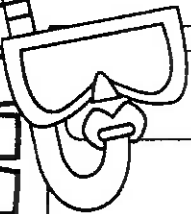

2. the sun is bright outside

2. _____





Week 5: Day 1



Addition

Find the sums for each problem below.


$5 + \underline{\quad} = 11$

50

$\underline{\quad} + 8 = 13$

+20

$6 + \underline{\quad} = 10$



Subtraction

Find the difference for each problem below.

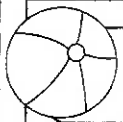
$16 - 8 = \underline{\quad}$

59

$14 - 5 = \underline{\quad}$

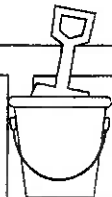
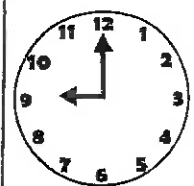
-34

$12 - 7 = \underline{\quad}$



Time

Write the times shown on the clocks



Shapes

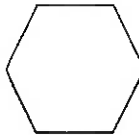
Read the questions. Circle the answers for each question.

1.



What shape is this?
square
rectangle

2.

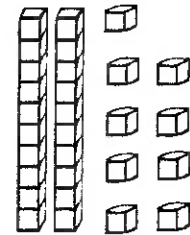


What shape is this?
hexagon
trapezoid



Place Value

Write how many tens and ones you have for each problem.



 tens ones =

 + =

Word Problem

Answer the problem below. Show your work.

Jessica picked 12 flowers. She gave some away. She has 8 left. How many did she give away?

add

subtract

 =

Fact Families

Using the numbers below, create a fact family.

6

7

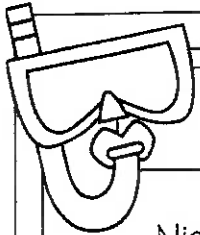


13

 + =

 + =

 - =

 - =



Reading Comprehension

Nick, Max, and Tim wanted to make pizza for dinner. First, they went to the store and bought the items they needed. Next, Nick and Max rolled out the dough on a pan. Then, Tim put on sauce, cheese, and pepperoni. After that, they put the pizza in the oven and waited for the pizza to cook. Finally, they pulled the pizza out of the oven, put it on their plates, and ate it.



Read the story above. Use the story to answer the questions

1. Who are the characters in the story?

2. What were they cooking?

3. What was the last thing they did?

4. What do you think they did after they ate the pizza?

Sentence Construction

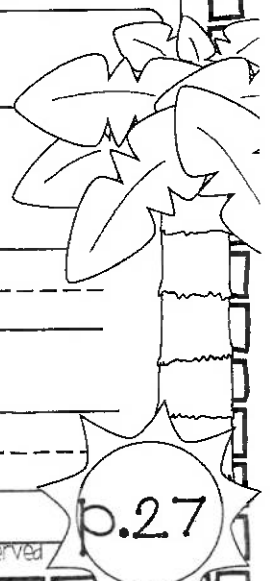
Correct the sentences below. Rewrite them correctly.


1. we ate at pizza hut

1.

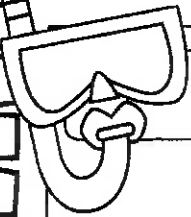

2. can you call fred and fran

2.





Week 5: Day 2




Addition

Find the sums for each problem below.

$8 + 4 = \underline{\quad\quad} \quad 46$

$7 + 2 = \underline{\quad\quad} \quad \begin{array}{r} +13 \\ \hline \end{array}$

$6 + 0 = \underline{\quad\quad}$



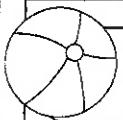
Subtraction

Find the difference for each problem below

$13 - 4 = \underline{\quad\quad} \quad 50$

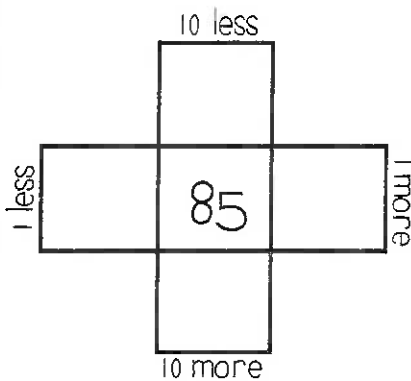
$11 - 9 = \underline{\quad\quad} \quad \begin{array}{r} -20 \\ \hline \end{array}$

$9 - 1 = \underline{\quad\quad}$



Multiples of 10

Write in the missing numbers.



True/False

Circle the problems below that are true.

1. $5 + 2 = 8$

2. $9 + 3 = 12$

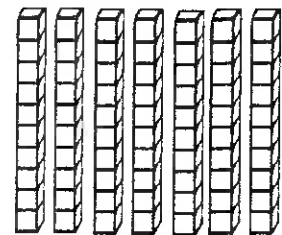
3. $4 + 4 = 8$

4. $6 + 3 = 10$



Place Value

Write how many tens and ones you have for each problem.



_____ tens _____ ones = _____
 _____ + _____ = _____

Word Problem

Answer the problem below. Show your work.

Nan has 13 flowers. She gave 4 to her sister. How many flowers does she have left?

add

subtract

$\underline{\quad\quad} \square \underline{\quad\quad} = \underline{\quad\quad}$

Fact Families

Using the numbers below, create a fact family.


--	--	--

$4 + \underline{\quad\quad} = 13$

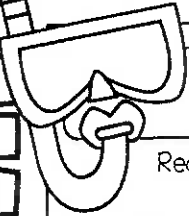

$4 + 9 = \underline{\quad\quad}$

$13 - \underline{\quad\quad} = 9$

$\underline{\quad\quad} - 9 = 4$



Week 5: Day 3



Dictionary Skills


Read the definitions. Decide which definition was used in the sentence.

trip

- to go on a vacation(noun)
- to fall over something(verb)

The stick tripped the girl.

- Definition 1
- Definition 2



ABC Order

Put the 6 words in ABC Order.

pen

book

glue

desk

stapler

eraser

1. _____

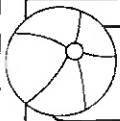
4. _____

2. _____

5. _____

3. _____

6. _____



Vowels

Circle the words with short vowels.

- | | |
|------|------|
| tame | mat |
| cab | late |
| bat | bite |
| came | lab |
| tack | take |



Pronouns

Circle the words that are pronouns.

- | | |
|-------|------|
| she | pen |
| light | him |
| her | I |
| paper | glue |
| they | feet |



Compound Words

Circle the compound words below.

toothpick	talking
driver	seashore
scissors	football
railroad	papers
earring	lemons

Sentence Construction

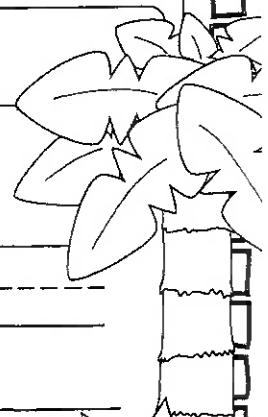
Correct the sentences below. Rewrite them correctly.


1. what did you eat for dinner

1. _____

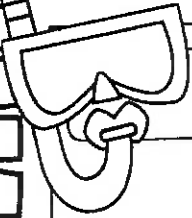

2. sam and meg went to eat

2. _____





Week 5: Day 3




Addition

Find the sums for each problem below.

$3 + 7 + 0 = \underline{\quad\quad} \quad 56$

$6 + 4 + 6 = \underline{\quad\quad} \quad \begin{array}{r} +32 \\ \hline \square \end{array}$

$2 + 1 + 4 = \underline{\quad\quad}$



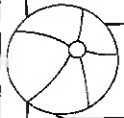
Subtraction

Find the difference for each problem below.

$14 - 1 = \underline{\quad\quad} \quad 78$

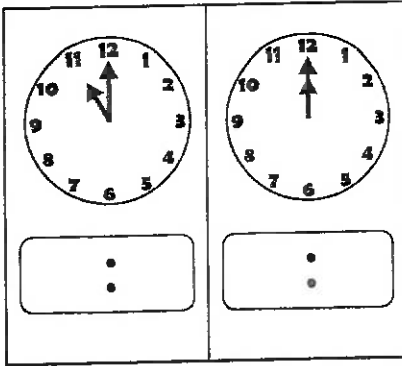
$14 - 2 = \underline{\quad\quad} \quad \begin{array}{r} -6 \\ \hline \square \end{array}$

$14 - 3 = \underline{\quad\quad}$



Time

Write the times shown on the clocks.



Counting

Fill in the missing numbers.

19, 20, , , 23,

 , , 70, 71,

47, , 49, ,

 , 100, , , 103



Comparing Numbers

Fill in the blanks with >, <, or =.

35 16

18 67

74 74

51 15

Word Problem

Answer the problem below. Show your work.

I have 3 pieces of gum, 4 pieces of chocolate, and 5 gummy bears. How many pieces of candy do I have in all?

add

subtract

$\underline{\quad\quad} \square \underline{\quad\quad} \square \underline{\quad\quad} = \underline{\quad\quad}$



Graphing

Use the graph below to answer the questions.

	1	2	3	4	5
Cheese					
Pepperoni					

- How many kids chose cheese?
- How many kids chose pepperoni?
- How many voted in all?

Week 6: Day 1



Syllables

Put the 6 words in the correct box.

runner eats draws
taken watch drawing

1 syllable

2 syllables

ABC Order

Put the 6 words in ABC Order.


soccer football baseball
tennis golf hockey

1. _____	4. _____
2. _____	5. _____
3. _____	6. _____

Categories

Circle the pictures that fit in the category written below

Beach



Nouns

Find the people, places, and things

mom eat
school cry
quiet shirt
count friend
gym write

Root Words

Circle the root words below

cans	can
tallest	tall
soft	softer
sharp	sharpest
eating	eat

Sentence Construction


Correct the sentences below. Rewrite them correctly.

1. the big moose is called tim


1. _____

2. rick and may like to draw

2. _____



Week 6: Day 1



Addition

Find the sums for each problem below.

$6 + \underline{\quad} = 17$

70

$\underline{\quad} + 2 = 10$

$$\begin{array}{r} 70 \\ + 10 \\ \hline \square \end{array}$$

$9 + \underline{\quad} = 13$



Subtraction

Find the difference for each problem below.

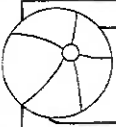
$19 - 10 = \underline{\quad}$

45

$11 - 11 = \underline{\quad}$

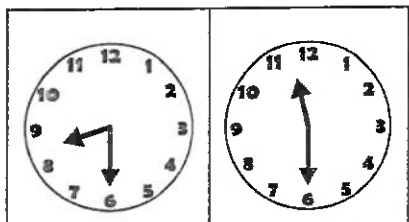
$$\begin{array}{r} 45 \\ - 20 \\ \hline \square \end{array}$$

$13 - 5 = \underline{\quad}$



Time

Write the times shown on the clocks.



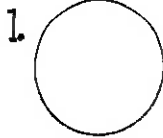
⋮

⋮

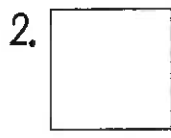


Shapes

Read the questions. Circle the answers for each question.



1. What shape is this?
hexagon
circle

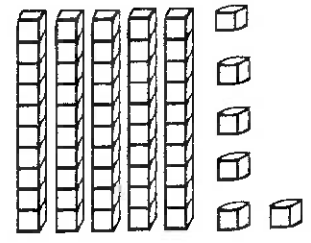


2. What shape is this?
square
triangle



Place Value

Write how many tens and ones you have for each problem.



___ tens ___ ones = ___
+ ___ = ___

Word Problem

Answer the problem below. Show your work

Kim has 12 coins. She gave 6 of them to Molly. How many does she have left?

add
subtract

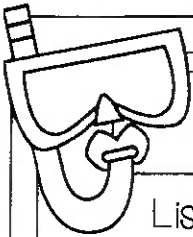


___ □ ___ = ___

Fact Families

Using the numbers below, create a fact family.


9 2 11

___ + ___ = ___
___ + ___ = ___
___ - ___ = ___
___ - ___ = ___



Reading Comprehension

Lisa wants to go outside to play, but it is very cold. She puts on her coat, mittens, hat, and boots. Then, she runs out the door. There is snow everywhere. Lisa's friend Grace comes over to play. They decide they want to build a huge snowman. They rolled the snow into three big balls. Then, they stacked the balls up and put sticks, eyes, a nose, and a hat on the snowman. When they finished building the snowman, the girls were cold. They went in Lisa's house and sat next to the fire. The girls had a fun, cold day.



Read the story above. Use the story to answer the questions

1. Who are the characters in the story?

3. What did the girls decide to do?

4. What do you like to do on cold days?

2. What is the setting?

Sentence Construction

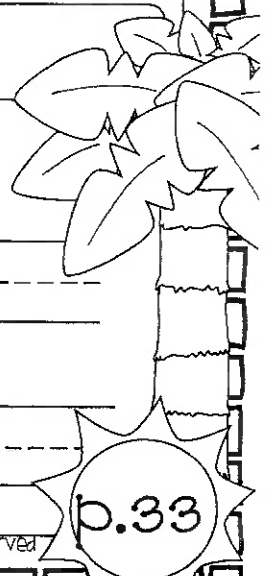
Correct the sentences below. Rewrite them correctly.

1. i left my book and pencil at school

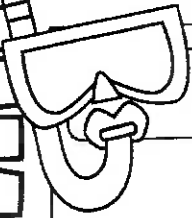


1. _____

2. did matt ride the horse

2. _____



Week 6: Day 2




Addition

Find the sums for each problem below

$$10 + 6 = \underline{\quad\quad} \quad 57$$

$$5 + 9 = \underline{\quad\quad} \quad \begin{array}{r} +12 \\ \hline \square \end{array}$$

$$3 + 6 = \underline{\quad\quad}$$



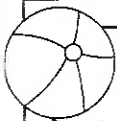
Subtraction

Find the difference for each problem below.

$$18 - 6 = \underline{\quad\quad} \quad 53$$

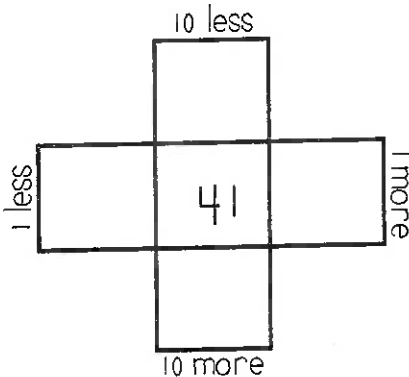
$$12 - 3 = \underline{\quad\quad} \quad \begin{array}{r} -30 \\ \hline \square \end{array}$$

$$8 - 7 = \underline{\quad\quad}$$



Multiples of 10

Write in the missing numbers



True/False

Circle the problems below that are true

1. $9 + 5 = 15$

2. $8 + 7 = 16$

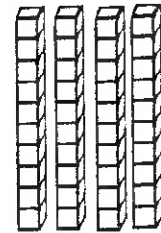
3. $9 + 2 = 11$

4. $7 + 7 = 14$



Place Value

Write how many tens and ones you have for each problem.



 tens ones =
 + =

Word Problem

Answer the problem below. Show your work.

Matt hit 8 balls Monday and 6 balls Tuesday. How many balls did Matt hit in all?

add

subtract

 =

Fact Families


Using the numbers below, create a fact family.

$$9 + \underline{\quad\quad} = 11$$

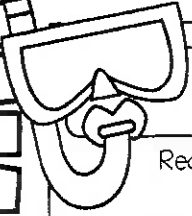

$$2 + 9 = \underline{\quad\quad}$$

$$11 - \underline{\quad\quad} = 9$$

$$\underline{\quad\quad} - 9 = 2$$



Week 6: Day 3



Dictionary Skills


Read the definitions. Decide which definition was used in the sentence.

bat

- an object used to hit a ball(noun)
- an animal that flies at night(noun)

He hit a foul ball with my bat.

- Definition 1
- Definition 2

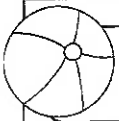


ABC Order

Put the 6 words in ABC Order.

lime	dime	time
bike	mike	hike

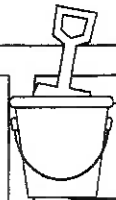
1. _____	4. _____
2. _____	5. _____
3. _____	6. _____



Vowels

Circle the words with long vowels.

bike	back
tack	tike
sack	lake
rake	map
sap	bake



Pronouns

Circle the words that are pronouns.

them	him
salt	pack
she	time
it	hit
leaf	her



Compound Words

Circle the compound words below.

watermelon	called
pans	bedroom
packet	teacup
grandson	vans
yellow	driveway

Sentence Construction


Correct the sentences below. Rewrite them correctly.


1. the squirrel climbed the tree

1. _____

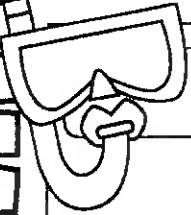

2. what is your favorite food

2. _____





Week 6: Day 3




Addition

Find the sums for each problem below.

$2+4+7 = \underline{\quad\quad} \quad 23$

$1+5+4 = \underline{\quad\quad} \quad \begin{array}{r} +32 \\ \hline \square \end{array}$

$3+3+0 = \underline{\quad\quad}$



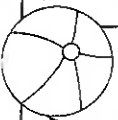
Subtraction

Find the difference for each problem below

$15 - 7 = \underline{\quad\quad} \quad 64$

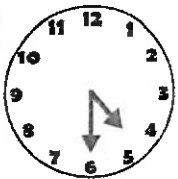
$15 - 8 = \underline{\quad\quad} \quad \begin{array}{r} -23 \\ \hline \square \end{array}$

$15 - 9 = \underline{\quad\quad}$



Time

Write the times shown on the clocks



:
:



:
:



Counting

Fill in the missing numbers

$35, 36, \underline{\quad}, \underline{\quad}, 39, \underline{\quad}$

$\underline{\quad}, \underline{\quad}, 84, 85, \underline{\quad}$

$19, \underline{\quad}, 21, \underline{\quad}, \underline{\quad}$

$\underline{\quad}, 99, \underline{\quad}, \underline{\quad}, 102$



Comparing Numbers

Fill in the blanks with $>$, $<$, or $=$.

$22 \underline{\quad} 34$

$89 \underline{\quad} 73$

$75 \underline{\quad} 75$

$32 \underline{\quad} 25$

Word Problem

Answer the problem below. Show your work.

My brother ate 10 French fries, 2 chicken fingers, and 1 ice cream.
How much did he eat in all?

add

subtract

$\underline{\quad} \square \underline{\quad} \square \underline{\quad} = \underline{\quad}$



Graphing

Use the graph below to answer the questions

	1	2	3	4	5
Cookies					
Cake					

- How many more chose cake than cookies? $\underline{\quad}$
- How many kids chose cookies? $\underline{\quad}$
- How many voted in all? $\underline{\quad}$

Week 7: Day 1



Syllables

Put the 6 words in the correct box.

- | | | |
|--------|------|---------|
| dog | cat | turtle |
| horses | fish | hamster |

1 syllable

2 syllables

ABC Order

Put the 6 words in ABC Order.

- | | | |
|-------|-------|-------|
| match | catch | hatch |
| patch | latch | batch |

- | | |
|----------|----------|
| 1. _____ | 4. _____ |
| 2. _____ | 5. _____ |
| 3. _____ | 6. _____ |

Nouns & Verbs

Circle the correct verb for the noun.

The girl _____ pictures.

- | | |
|------|-------|
| draw | draws |
|------|-------|

My friends _____.

- | | |
|------|-------|
| talk | talks |
|------|-------|

Proper Nouns

Find the specific people, places, and things.

- | | |
|---------|-----------|
| Betty | girl |
| dog | McDonalds |
| sofa | Walmart |
| Georgia | toys |
| trees | Mr. White |

Singular Nouns

Circle the singular nouns.

pencils	pencil
books	book
cat	cats
friends	friend
chicken	chickens

Sentence Construction


Correct the sentences below. Rewrite them correctly.

1. my birthday is april 4 2000

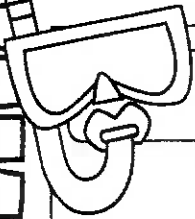

1. _____

2. the bear ate honey

2. _____



Week 7: Day 1



Addition

Find the sums for each problem below.


$4 + \underline{\quad} = 13$

40

$\underline{\quad} + 6 = 11$

+20

$8 + \underline{\quad} = 8$



Subtraction

Find the difference for each problem below.

$16 - 9 = \underline{\quad}$ 67

$12 - 11 = \underline{\quad}$

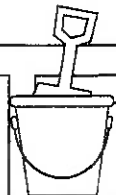

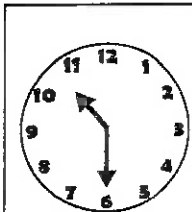
-33

$15 - 6 = \underline{\quad}$



Time

Write the times shown on the clocks.



Shapes

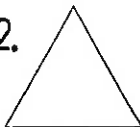
Read the questions. Circle the answers for each question.

1.



What shape is this?
hexagon
trapezoid

2.

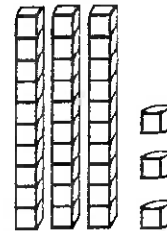


What shape is this?
square
triangle



Place Value

Write how many tens and ones you have for each problem.



 tens ones =
 + =

Word Problem

Answer the problem below. Show your work.

Pam ran 8 laps yesterday and 2 laps today. How many more laps did she run yesterday than today?

add

subtract

Fact Families

Using the numbers below, create a fact family.

10

5


15

$\underline{\quad} + \underline{\quad} = \underline{\quad}$

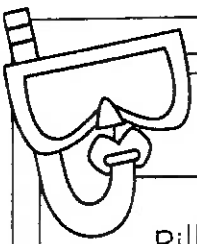

$\underline{\quad} + \underline{\quad} = \underline{\quad}$

$\underline{\quad} - \underline{\quad} = \underline{\quad}$

$\underline{\quad} - \underline{\quad} = \underline{\quad}$



Week 7: Day 2



Reading Comprehension

Billy the rabbit likes to play outside. His favorite thing to do is eat carrots. One day, Billy hopped through the grass into Mrs. Smith's yard. He spotted a bit of orange sticking out of the ground. He hopped around a tree, down the hill, and slid under the fence. Billy jumped on top of the orange thing sticking out of the ground. He got a huge surprise! It was not a carrot. It was an orange paint stick. Billy hopped out of the garden without a tasty snack.



Read the story above. Use the story to answer the questions.

1. Who is the main character in the story?

4. What was the surprise?

2. Where did the story take place?

5. How do you think Billy felt? Why?

3. What does Billy like to eat?

Sentence Construction

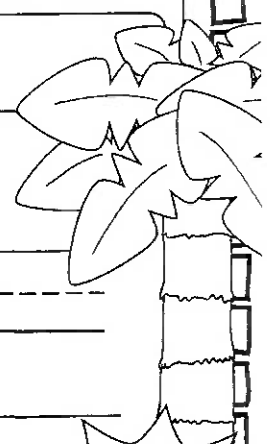
Correct the sentences below. Rewrite them correctly.


1. debbie ate meatloaf for lunch

1.

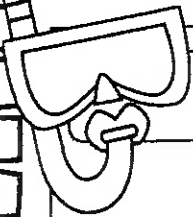

2. can you call mary tonight

2.





Week 7: Day 2




Addition

Find the sums for each problem below.

$9 + 7 = \underline{\quad} \quad 74$

$3 + 10 = \underline{\quad} \quad \begin{array}{r} +23 \\ \hline \square \end{array}$

$8 + 8 = \underline{\quad}$



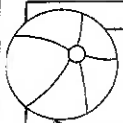
Subtraction

Find the difference for each problem below.

$17 - 8 = \underline{\quad} \quad 46$

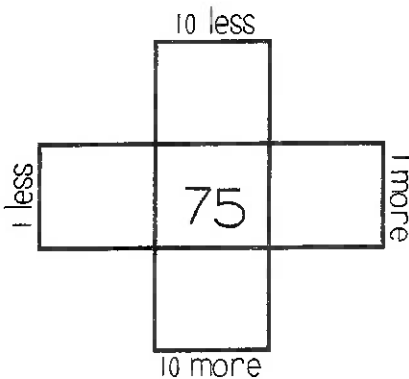
$10 - 4 = \underline{\quad} \quad \begin{array}{r} -5 \\ \hline \square \end{array}$

$9 - 6 = \underline{\quad}$



Multiples of 10

Write in the missing numbers



True/False

Circle the problems below that are false

1. $2 + 3 = 6$

2. $9 + 4 = 13$

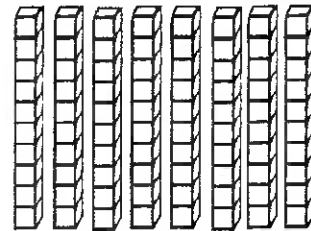
3. $7 + 7 = 14$

4. $9 + 2 = 10$



Place Value

Write how many tens and ones you have for each problem.



 tens ones =
 + =

Word Problem

Answer the problem below. Show your work.

Kate had 12 pieces of candy. She gave 3 pieces of candy to Matt. How much candy does Kate left?

add

subtract

 =


Fact Families

Using the numbers below, create a fact family.

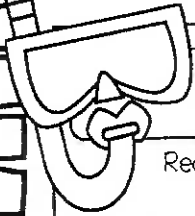



$7 + \underline{\quad} = 14$

$14 - \underline{\quad} = 7$



Week 7: Day 3



Dictionary Skills


Read the definitions. Decide which definition was used in the sentence.

coat

1. a jacket (noun)
2. a layer of paint (noun)

She wore a coat because it was cold.

- Definition 1
- Definition 2

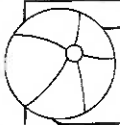


ABC Order

Put the 6 words in ABC Order.

dove stove above
rove cove love

1. _____	4. _____
2. _____	5. _____
3. _____	6. _____



Vowels

Circle the words with short vowels.

back	right
trick	file
tile	cup
page	rag
sock	bale



Pronouns

Circle the words that are pronouns.

them	him
salt	pack
she	time
it	hit
leaf	her



Compound Words

Circle the compound words below.

chilly	skateboard
tennis	butterfly
footprint	paper
toothpaste	greener
horns	hamburger

Sentence Construction

Correct the sentences below. Rewrite them correctly.


1. where did they go on vacation

1. _____


2. did you watch the movie

2. _____





Week 7: Day 3




Addition

Find the sums for each problem below.

$1 + 5 + 6 = \underline{\quad\quad\quad} \quad 45$

$7 + 1 + 5 = \underline{\quad\quad\quad} \quad \begin{array}{r} +32 \\ \hline \square \end{array}$

$5 + 0 + 8 = \underline{\quad\quad\quad}$



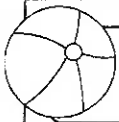
Subtraction

Find the difference for each problem below.

$17 - 8 = \underline{\quad\quad\quad} \quad 88$

$17 - 9 = \underline{\quad\quad\quad} \quad \begin{array}{r} -24 \\ \hline \square \end{array}$

$17 - 10 = \underline{\quad\quad\quad}$



Time

Write the times shown on the clocks.

$\begin{array}{c} : \\ : \end{array}$	$\begin{array}{c} : \\ : \end{array}$



Counting

Fill in the missing numbers

$23, 24, \underline{\quad}, \underline{\quad}, 27, \underline{\quad}$

$\underline{\quad}, \underline{\quad}, 63, 64, \underline{\quad}$

$4, \underline{\quad}, 6, \underline{\quad}, \underline{\quad}$

$\underline{\quad}, 89, \underline{\quad}, \underline{\quad}, 92$



Comparing Numbers

Fill in the blanks with $>$, $<$, or $=$.

$98 \underline{\quad} 76$

$23 \underline{\quad} 32$

$83 \underline{\quad} 64$

$30 \underline{\quad} 30$

Word Problem

Answer the problem below. Show your work.

It takes 2 hours to do math, 1 hour to do science, and 3 hours to do reading. How many hours does it take to do all the subjects?

add

subtract

$\underline{\quad} \square \underline{\quad} \square \underline{\quad} = \underline{\quad}$



Graphing

Use the graph below to answer the questions

	1	2	3	4	5	6	7
apples							
bananas							
oranges							

- How many chose apples and oranges? $\underline{\quad}$
- How many chose bananas? $\underline{\quad}$
- How many voted in all? $\underline{\quad}$

Week 8: Day 1



Syllables

Put the 6 words in the correct box.

actor cab cabin
bunny nap fun

1 syllable

2 syllables

ABC Order

Put the 6 words in ABC Order.

tomato lettuce beans
potato squash carrot

1. _____	4. _____
2. _____	5. _____
3. _____	6. _____

Nouns & Verbs

Circle the correct verb for the noun.

My horse _____ buggles.

pull

pulls

The cats _____ their food.

eat

eats

Proper Nouns

Find the specific people, places, and things.

man Zack

Olive Garden store

Italy river

girl Mrs. Sims

Old Navy school

Singular Nouns

Circle the singular nouns.

bee

bees

dogs

dog

goats

goat

horses

horse

cow

cows

Sentence Construction

Correct the sentences below. Rewrite them correctly.



1. i like cake cookies and chips

1. _____

2. may made pasta for lunch

2. _____

Week 8: Day 1



Addition

Find the sums for each problem below.

$6 + \underline{\quad} = 12$

$\underline{\quad} + 30 = 30$

$\underline{\quad} + 3 = 6$

$$\begin{array}{r} 30 \\ +30 \\ \hline \square \end{array}$$

$7 + \underline{\quad} = 14$

Subtraction

Find the difference for each problem below.

$14 - 6 = \underline{\quad}$

$73 - \underline{\quad} = 73$


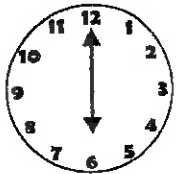
$10 - 3 = \underline{\quad}$

$$\begin{array}{r} 73 \\ -21 \\ \hline \square \end{array}$$

$12 - 6 = \underline{\quad}$

Time

Write the times shown on the clocks.



⋮
⋮

⋮
⋮

Shapes

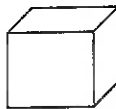
Read the questions. Circle the answers for each question.

1.



What shape is this?
circle
cylinder

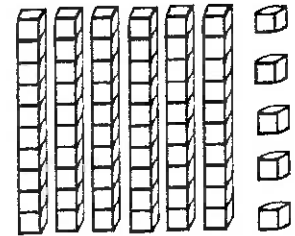
2.



What shape is this?
rectangle
cube

Place Value

Write how many tens and ones you have for each problem.



 tens ones =
 + =

Word Problem

Answer the problem below. Show your work.

Max ate 5 apple slices. Cam ate 7 apple slices. How many apple slices did they eat altogether?

add

subtract

 \square =

Fact Families

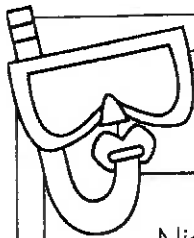


Using the numbers below, create a fact family.

2

8

10

 + =
 + =
 - =
 - =



Reading Comprehension

Nick and Joe went swimming in the ocean. They put their heads under water. Both of them opened their eyes. "Ouch!" cried Joe. "The water burned my eyes!" said Nick. They ran back to their towels and grabbed their goggles. Nick and Joe dove back into the water. They stuck their heads under water and saw lots of little fish. Joe saw a huge shell and grabbed it. Nick saw a shell, too. "Ouch!" Nick yelled. Joe looked at Nick's hand. There was a tiny red mark. Nick had accidentally grabbed a tiny crab.



Read the story above. Use the story to answer the questions.

1. Who are the main characters in the story?

2. Where did the story take place?

3. What was wrong in the beginning?

4. How did they solve the problem?

5. How do you think Nick felt at the end? Why?

Sentence Construction


Correct the sentences below. Rewrite them correctly.


1. logan and ben like baseball

1.

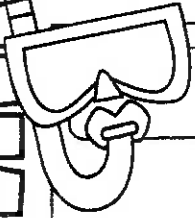

2. will you talk to megan

2.





Week 8: Day 2




Addition

Find the sums for each problem below.

$11 + 4 = \underline{\quad} \quad 82$

$6 + 6 = \underline{\quad} \quad \begin{array}{r} +16 \\ \hline \square \end{array}$

$9 + 2 = \underline{\quad}$



Subtraction

Find the difference for each problem below.

$11 - 8 = \underline{\quad} \quad 81$

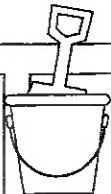
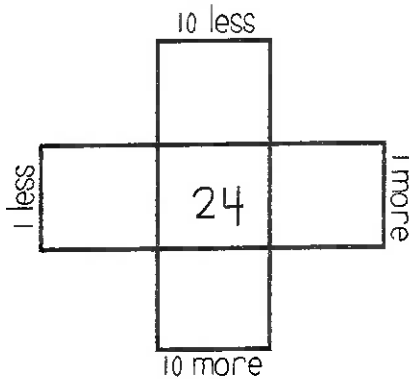
$16 - 7 = \underline{\quad} \quad \begin{array}{r} -1 \\ \hline \square \end{array}$

$10 - 3 = \underline{\quad}$



Multiples of 10

Write in the missing numbers.



True/False

Circle the problems below that are false

1. $4 + 4 = 8$

2. $6 + 3 = 10$

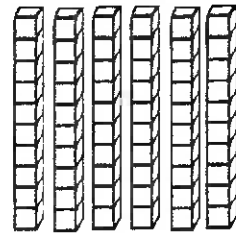
3. $9 + 4 = 13$

4. $7 + 4 = 11$



Place Value

Write how many tens and ones you have for each problem



 tens ones =

 + =

Word Problem

Answer the problem below. Show your work.

James ran 8 miles yesterday and 2 miles today. How many miles did he run altogether?

add

subtract

 \square =

Fact Families

Using the numbers below, create a fact family.



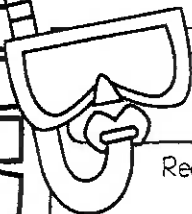


$8 + 9 = \underline{\quad}$

$8 + \underline{\quad} = 17$

$17 - \underline{\quad} = 8$

$\underline{\quad} - 8 = 9$

Week 8: Day 3



Dictionary Skills


Read the definitions. Decide which definition was used in the sentence.

saw

1. to see something (verb)
2. a tool used to cut items (noun)

Zack saw the birds flying.

- Definition 1
- Definition 2



ABC Order

Put the 6 words in ABC Order.

who did how
can is are

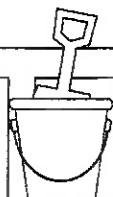
1. _____	4. _____
2. _____	5. _____
3. _____	6. _____



Vowels

Circle the words with short vowels.

bet	bale
met	kite
tale	set
fed	feed
pet	Pete



Pronouns

Circle the words that are pronouns.

it	arm
girls	them
horses	he
her	man
Tim	they



Compound Words

Circle the compound words below.

honeybee	lifeboat
careful	birds
birdhouse	barely
drawing	airfield
texting	baseball

Sentence Construction

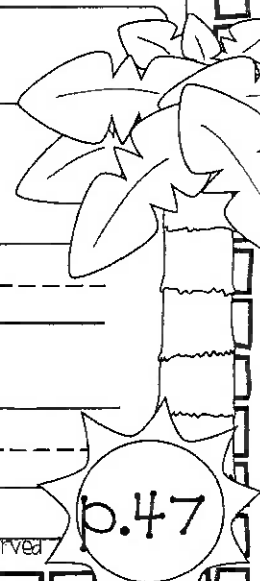
Correct the sentences below. Rewrite them correctly.


1. jack went to the movies

1. _____


2. susan and pam like to paint

2. _____





Week 8: Day 3




Addition

Find the sums for each problem below.

$3 + 2 + 4 = \underline{\quad\quad} \quad 61$

$6 + 4 + 1 = \underline{\quad\quad} \quad \begin{array}{r} +22 \\ \hline \square \end{array}$

$2 + 2 + 3 = \underline{\quad\quad}$



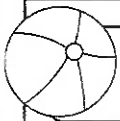
Subtraction

Find the difference for each problem below.

$13 - 0 = \underline{\quad\quad} \quad 74$

$13 - 1 = \underline{\quad\quad} \quad \begin{array}{r} -34 \\ \hline \square \end{array}$

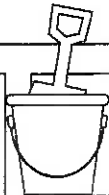
$13 - 2 = \underline{\quad\quad}$



Time

Write the times shown on the clocks.

<input type="text"/>	<input type="text"/>



Counting

Fill in the missing numbers

$45, 46, \underline{\quad}, \underline{\quad}, 49, \underline{\quad}$

$\underline{\quad}, \underline{\quad}, 82, 83, \underline{\quad}$

$7, \underline{\quad}, 9, \underline{\quad}, \underline{\quad}$

$\underline{\quad}, 101, \underline{\quad}, \underline{\quad}, 104$



Comparing Numbers

Fill in the blanks with $>$, $<$, or $=$.

$100 \underline{\quad} 95$

$40 \underline{\quad} 40$

$76 \underline{\quad} 89$

$39 \underline{\quad} 56$

Word Problem

Answer the problem below. Show your work.

The boy collected 4 bananas, 5 apples, and 6 oranges. How much fruit did he collect in all?

add

subtract

$\underline{\quad} \square \underline{\quad} \square \underline{\quad} = \underline{\quad}$



Graphing

Use the graph below to answer the questions.

	1	2	3	4	5	6	7
giraffes							
lions							
hippos							

- How many chose lions and hippos?
 $\underline{\quad}$
- How many chose giraffes? $\underline{\quad}$
- How many voted in all? $\underline{\quad}$

Week 9: Day 1



Syllables

Put the 6 words in the correct box.

super dogs walks
berry wonder friend

1 syllable

2 syllables

ABC Order

Put the 6 words in ABC Order.

Zack Jason Beth
Mary Kristen Tim

1.

2.

3.

4.

5.

6.

Nouns & Verbs

Circle the correct verb for the noun.

The boys _____ ball.

play

plays

The horses _____ water.

drink

drinks

Nouns

Circle people, places, and things.

boy called

of kids

bank the

zoo baseball

came walked

Plural Nouns

Circle the plural nouns.

tree

trees

bikes

bike

cars

car

animal

animals

letters

letter

Sentence Construction

Correct the sentences below. Rewrite them correctly.



1. can you draw a pig

1.

2. tim plays golf tennis and baseball

2.

Week 9: Day 1



Addition

Find the sums for each problem below.

$8 + \underline{\quad} = 11$

70

$\underline{\quad} + 4 = 9$

$+20$

$9 + \underline{\quad} = 13$

Subtraction

Find the difference for each problem below.

$12 - 6 = \underline{\quad}$

64

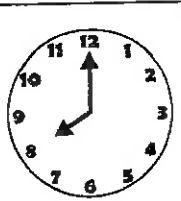
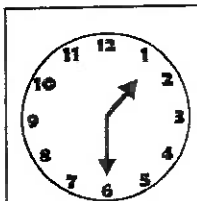
$11 - 7 = \underline{\quad}$

-31

$17 - 8 = \underline{\quad}$

Time

Write the times shown on the clocks.

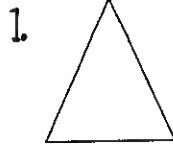


:

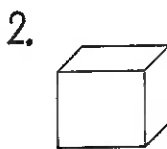
:

Shapes

Read the questions. Circle the answers for each question.



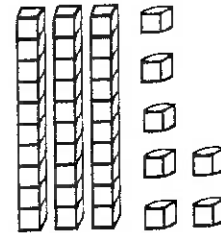
What shape is this?
triangle
rectangle



What shape is this?
cube
circle

Place Value

Write how many tens and ones you have for each problem.



 tens ones =
 + =

Word Problem

Answer the problem below. Show your work.

Gabe scored 10 points in his game Friday and 3 points in his game Saturday. How many points did he score in all?

add

subtract

_ □ _ = _

Fact Families

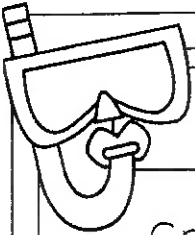


Using the numbers below, create a fact family.

6

7

13

$\underline{\quad} + \underline{\quad} = \underline{\quad}$
 $\underline{\quad} + \underline{\quad} = \underline{\quad}$
 $\underline{\quad} - \underline{\quad} = \underline{\quad}$
 $\underline{\quad} - \underline{\quad} = \underline{\quad}$



Reading Comprehension

Grace wanted to paint a picture. She went to her desk and pulled out white paper and her paint set. She took her brush and touched the yellow. Then, she touched her paper, but nothing was there. Oops! Grace forgot to get water to wet her paintbrush. She went to the kitchen and filled a glass with water. Then, she dipped the tip of her paintbrush into the water. Grace touched the yellow again and touched the paper. This time there was a bright yellow circle.



Read the story above. Use the story to answer the questions.

1. Who is the main character in the story?

2. What was the problem?

4. How did she solve the problem?

5. What do you think Grace painted with the yellow paint?

Sentence Construction

Correct the sentences below. Rewrite them correctly.

1. the cup had lemonade



1.

2. how old will you be may 5 2013

2.



Week 9: Day 2



Addition

Find the sums for each problem below.

$$10 + 2 = \underline{\quad} \quad 25$$

$$8 + 6 = \underline{\quad} \quad \begin{array}{r} +13 \\ \hline \square \end{array}$$

$$7 + 1 = \underline{\quad}$$

Subtraction

Find the difference for each problem below.

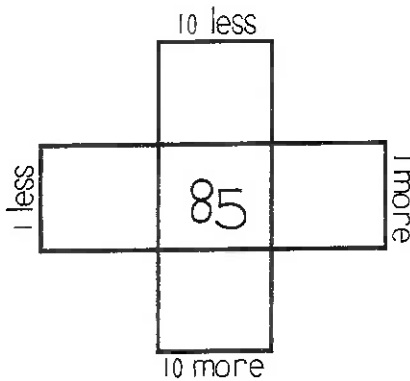
$$10 - 4 = \underline{\quad} \quad 89$$

$$15 - 9 = \underline{\quad} \quad \begin{array}{r} -26 \\ \hline \square \end{array}$$

$$11 - 2 = \underline{\quad}$$

Multiples of 10

Write in the missing numbers.



True/False

Circle the problems below that are true.

1. $9 + 3 = 12$

2. $8 + 5 = 14$

3. $10 + 0 = 10$

4. $5 + 4 = 10$

Place Value

Write how many tens and ones you have for each problem.



 tens ones =
 + =

Word Problem

Answer the problem below. Show your work.

Ann has 8 coins. Max has 9 coins.
 How many coins do they have altogether?

add

subtract

$$\underline{\quad} \square \underline{\quad} = \underline{\quad}$$

Fact Families

Using the numbers below, create a fact family.




$$7 + 6 = \underline{\quad}$$

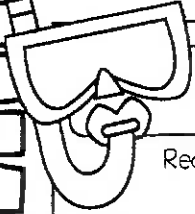

$$6 + \underline{\quad} = 13$$

$$13 - \underline{\quad} = 7$$

$$\underline{\quad} - 7 = 6$$



Week 9: Day 3



Dictionary Skills


Read the definitions. Decide which definition was used in the sentence.

saw

- to see something (verb)
- a tool used to cut items (noun)

Zack saw the birds flying.

- Definition 1
- Definition 2

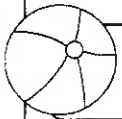


ABC Order

Put the 6 words in ABC Order.

who	did	how
can	is	are

1. _____	4. _____
2. _____	5. _____
3. _____	6. _____



Vowels

Circle the words with short vowels

bet	bale
met	kite
tale	set
fed	feed
pet	Pete



Pronouns

Circle the words that are pronouns

it	arm
girls	them
horses	he
her	man
Tim	they



Compound Words

Circle the compound words below.

honeybee	lifeboat
careful	birds
birdhouse	barely
drawing	airfield
texting	baseball

Sentence Construction


Correct the sentences below. Rewrite them correctly.


1. my cousin lives in texas

1. _____

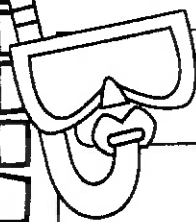

2. can you pick up ben

2. _____





Week 9: Day 3




Addition

Find the sums for each problem below

$7 + 0 + 4 = \underline{\quad\quad} \quad 40$

$3 + 4 + 5 = \underline{\quad\quad} \quad \begin{array}{r} +10 \\ \hline \square \end{array}$

$5 + 5 + 1 = \underline{\quad\quad}$



Subtraction

Find the difference for each problem below

$14 - 7 = \underline{\quad\quad} \quad 92$

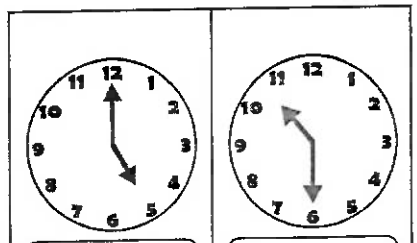
$14 - 5 = \underline{\quad\quad} \quad \begin{array}{r} -30 \\ \hline \square \end{array}$

$14 - 3 = \underline{\quad\quad}$



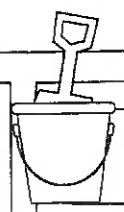
Time

Write the times shown on the clocks



⋮

⋮



Counting

Fill in the missing numbers.

$72, 73, \underline{\quad}, \underline{\quad}, 76, \underline{\quad}$

$\underline{\quad}, \underline{\quad}, 98, 99, \underline{\quad}$

$12, \underline{\quad}, 14, \underline{\quad}, \underline{\quad}$

$\underline{\quad}, 52, \underline{\quad}, \underline{\quad}, 55$



Comparing Numbers

Fill in the blanks with >, <, or =.

$40 \underline{\quad} 86$

$31 \underline{\quad} 90$

$74 \underline{\quad} 65$

$80 \underline{\quad} 92$

Word Problem

Answer the problem below. Show your work

Bill caught 4 fish Monday, 8 fish Tuesday, and 3 fish Wednesday. How many fish did Bill catch in all?

add

subtract

$\underline{\quad} \square \underline{\quad} \square \underline{\quad} = \underline{\quad}$


p.54

Graphing


Use the graph below to answer the questions.

	1	2	3	4	5	6	7
red							
yellow							
blue							

- How many chose red and blue? $\underline{\quad}$
- How many more chose blue than yellow? $\underline{\quad}$
- What color had five votes? $\underline{\quad}$



Week 10: Day 1




Syllables

Put the 6 words in the correct box.

ham turkey dressing
squash beets chicken

1 syllable

2 syllables



ABC Order

Put the 6 words in ABC Order.

thick pail boat
yet ocean fast

1.

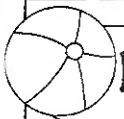
4.

2.

5.

3.

6.



Nouns & Verbs

Circle the correct verb for the noun.

Caleb _____ his name.

write

writes

Jess _____ her friend.

call

calls



Nouns

Circle people, places, and things

fat feather

raft ran

elephant empty

pull tunnel

key shiny



Plural Nouns

Circle the plural nouns.

kits

kit

farmers

farmer

tent

tents

pancakes

pancake

jar

jars

Sentence Construction

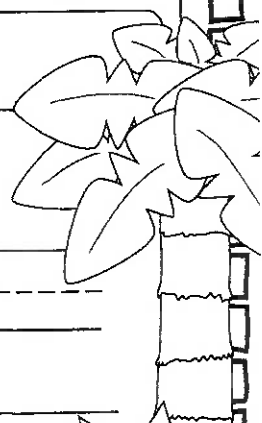
Correct the sentences below. Rewrite them correctly.


1. the kids whisper to each other

1.

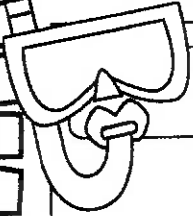

2. it is hot in june and july

2.





Week 10: Day 1



Addition

Find the sums for each problem below.


$3 + \underline{\quad} = 13$

65

$\underline{\quad} + 6 = 9$

+32

$7 + \underline{\quad} = 12$



Subtraction

Find the difference for each problem below.

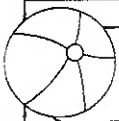
$5 - 4 = \underline{\quad}$

57

$9 - 2 = \underline{\quad}$


-25

$13 - 5 = \underline{\quad}$



Time

Write the times shown on the clocks



:

:



Shapes

Read the questions. Circle the answers for each question.

1.



___ sides
___ corners

2.

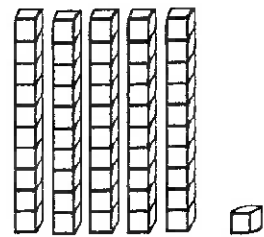


___ sides
___ corners



Place Value

Write how many tens and ones you have for each problem.



___ tens ___ ones = ___
___ + ___ = ___

Word Problem

Answer the problem below. Show your work.

London has 20 markers. She gives some away. She has 10 markers left. How many did London give away?

add

subtract

$\underline{\quad} \square \underline{\quad} = \underline{\quad}$

Fact Families

Using the numbers below, create a fact family.

8

2


10

$\underline{\quad} + \underline{\quad} = \underline{\quad}$

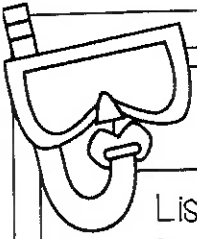

$\underline{\quad} + \underline{\quad} = \underline{\quad}$

$\underline{\quad} - \underline{\quad} = \underline{\quad}$

$\underline{\quad} - \underline{\quad} = \underline{\quad}$



Week 10: Day 2



Reading Comprehension

Lisa loves to read books. She went to the library last week and got five new books to read. Lisa read four of them in one night. Today, Lisa is taking her books back to the library. When she gets there, she puts the books on the counter. Mrs. Black checks the books in and tells her about the new books. Lisa quietly walks over and looks at the new books. She picks one horse book, one princess book, and one book that looks funny. Lisa walks back to Mrs. Black to check out her books. She cannot wait to read them when she gets home.



Read the story above. Use the story to answer the questions

1. Who is the main character in the story?

2. What does Lisa like to do?

3. Who helped Lisa?

4. Which book would you read first? Why?

Sentence Construction

Correct the sentences below. Rewrite them correctly.


1. did you pick up the cart

1.

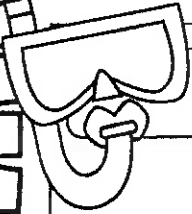

2. christmas is in december

2.





Week 10: Day 2




Addition

Find the sums for each problem below.

$10 + 2 = \underline{\quad} \quad 25$

$8 + 6 = \underline{\quad}$
 $\begin{array}{r} +13 \\ \hline \square \end{array}$

$7 + 1 = \underline{\quad}$



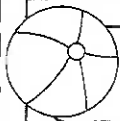
Subtraction

Find the difference for each problem below.

$10 - 4 = \underline{\quad} \quad 89$

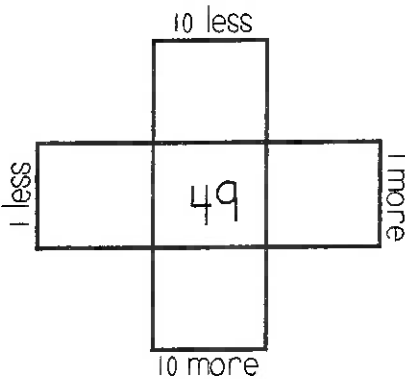
$15 - 9 = \underline{\quad}$
 $\begin{array}{r} -26 \\ \hline \square \end{array}$

$11 - 2 = \underline{\quad}$



Multiples of 10

Write in the missing numbers



True/False

Circle the problems below that are true

1. $8 + 4 = 12$

2. $9 + 3 = 11$

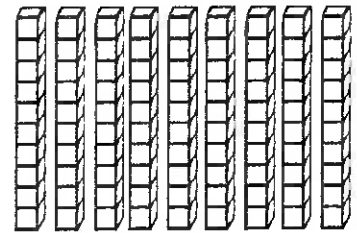
3. $7 + 7 = 13$

4. $6 + 3 = 9$



Place Value

Write how many tens and ones you have for each problem.



 tens ones =

 + =

Word Problem

Answer the problem below. Show your work

Pam read 9 books in June and 4 books in July. How many more books did she read in June than July?

add

subtract

 \square =

Fact Families

Using the numbers below, create a fact family.



$4 + 6 = \underline{\quad}$

$6 + \underline{\quad} = 10$

$10 - \underline{\quad} = 4$

$\underline{\quad} - 4 = 6$

Week 10: Day 3

Dictionary Skills

Read the definitions. Decide which definition was used in the sentence.

fly

1. type of insect (noun)
2. to move through the air (verb)

The fly buzzed around the orange.

- Definition 1
- Definition 2

ABC Order

Put the 6 words in ABC Order.

zebra

kite

bear

nest

lizard

egg

1. _____

4. _____

2. _____

5. _____

3. _____

6. _____

Vowels

Circle the words with short vowels.

toss	toes
pays	pass
lost	low
fast	late
dill	ties

Pronouns

Circle the words that are pronouns.

his	heart
pots	it
corn	they
ducks	desk
her	him

Compound Words

Circle the compound words below.

butter	software
football	bases
shoelace	silly
stairs	teapot
drummer	jellyfish

Sentence Construction


Correct the sentences below. Rewrite them correctly.

1. we are eating tacos today


1. _____

2. it is raining sunday

2. _____



Week 10: Day 3




Addition

Find the sums for each problem below.

$3 + 2 + 5 = \underline{\quad\quad} \quad 60$

$7 + 6 + 2 = \underline{\quad\quad} \quad \begin{array}{r} +15 \\ \hline \square \end{array}$

$7 + 3 + 4 = \underline{\quad\quad}$



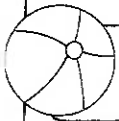
Subtraction

Find the difference for each problem below.

$18 - 10 = \underline{\quad\quad} \quad 73$

$18 - 9 = \underline{\quad\quad} \quad \begin{array}{r} -20 \\ \hline \square \end{array}$

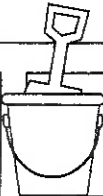
$18 - 8 = \underline{\quad\quad}$



Time

Write the times shown on the clocks.

$\square : \square$	$\square : \square$



Counting

Fill in the missing numbers.

$65, 66, \underline{\quad}, \underline{\quad}, 69, \underline{\quad}$

$\underline{\quad}, \underline{\quad}, 83, 84, \underline{\quad}$

$19, \underline{\quad}, 21, \underline{\quad}, \underline{\quad}$

$\underline{\quad}, 88, \underline{\quad}, \underline{\quad}, 91$



Comparing Numbers

Fill in the blanks with $>$, $<$, or $=$.

$25 \underline{\quad} 20$

$67 \underline{\quad} 43$

$77 \underline{\quad} 77$

$15 \underline{\quad} 30$

Word Problem

Answer the problem below. Show your work.

The art teacher has 4 blue crayons, 2 red crayons, and 5 yellow crayons. How many crayons does she have in all?

add

subtract


$\underline{\quad} \square \underline{\quad} \square \underline{\quad} = \underline{\quad}$

Graphing

Use the graph below to answer the questions.

	1	2	3	4	5	6	7
pizza							
hotdogs							
hamburgers							

- How many chose pizza and hotdogs?
 $\underline{\quad}$
- Which food had 4 votes? $\underline{\quad}$
- Which food had 1 vote? $\underline{\quad}$



Congratulations!!!
You completed
your packet!